


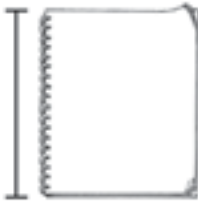
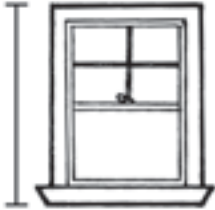
Name \_\_\_\_\_

# Measuring Using Different Units

Find each object in your classroom.

Estimate its length.

Then measure using straws.

	Estimate	Measure
1. 	about _____ straws	about _____ straws
2. 	about _____ straws	about _____ straws
3. 	about _____ straws	about _____ straws

## Reasonableness

4. Which is the best estimate for the length of the bicycle?

- (A) about 4 cubes
- (B) about 9 cubes
- (C) about 4 straws
- (D) about 9 straws

